

1. Work out  $28.6 + 14.57$

.....  
(1 mark)

2. Work out  $24.6 - 14.37$

.....  
(1 mark)

3. Work out  $0.8 \times 0.3$

.....  
(2 marks)

4. Work out  $\text{£}5.48 \div 4$

.....  
(2 marks)

5. Round 12.36 to the nearest integer

.....  
(1 mark)

6. Work out  $-4 \times -8$

.....  
(1 mark)7. What is  $\frac{2}{3}$  of 36.....  
(1 mark)

8. Find 30% of 35

.....  
(1 mark)9. Convert  $\frac{2}{3}$  to a decimal.....  
(1 mark)

10. Calculate  $4^2 + \sqrt{169}$

.....  
(2 marks)

11. Write down the nth term

1, 3, 5, 7, 9

.....  
(2 marks)

12. Simplify

 $\frac{24}{30}$ .....  
(1 mark)

Name : ..... Class..... Score.....

13. Simplify  $5b + 2b^2 - 2b - 3b^2$

.....  
(2 marks)

14. Simplify  $4g \times 9h$

.....  
(1 mark)

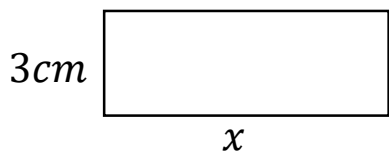
15. Expand and simplify  
 $2(a + 3) + 3(a + 1)$

.....  
(2 marks)

16. What is the HCF of 12 and 8

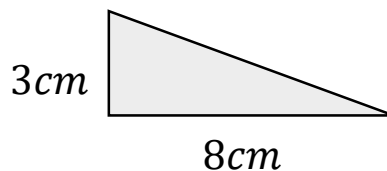
.....  
(2 marks)

17. Calculate  $x$




Perimeter = 22cm .....  
(1 mark)

18. Calculate the area



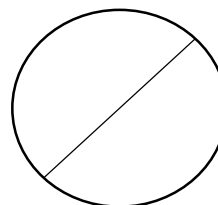
.....  
(2 marks)

19. Name this shape




.....  
(1 mark)

20. Name this part of a circle



.....  
(1 mark)

21. Draw all the lines of symmetry



.....  
(1 mark)

22. Calculate  $x$



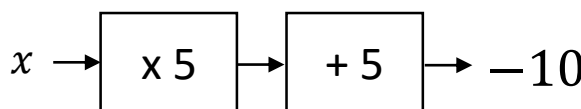
$x = \dots\dots\dots$   
(1 mark)

23. Workout

$$12^2 - 5 \times 4$$

.....  
(2 marks)

24. Solve



$x = \dots\dots\dots$   
(1 mark)